

SUMMATIVE ASSESSMENT - II - 2016 - 2017

CLASS-X - MATHS - PAPER-II

Part - A & B

KEY

Class : X

Part - A

Marks : 60

Section - I (Each question carries 1 mark)

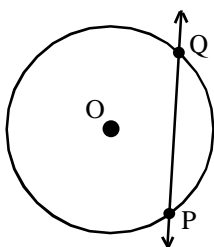
1. Given points A(2, 5); B (6, 1)

$$\begin{aligned} \text{Distance between two points } AB &= \sqrt{(x_2 - x_1)^2 + (y_2 - y_1)^2} \quad \left. \vphantom{\sqrt{(x_2 - x_1)^2 + (y_2 - y_1)^2}} \right\} \frac{1}{2}m \\ &= \sqrt{(6-2)^2 + (1-5)^2} \\ &= \sqrt{(4)^2 + (-4)^2} \\ &= \sqrt{16+16} \\ &= \sqrt{32} \\ &= 4\sqrt{2} \text{ units} \quad \left. \vphantom{\sqrt{32}} \right\} \frac{1}{2}m \end{aligned} \quad 1m$$

2. **A.A Law of Similarity :**

If two angles of one triangle are respectively equal to the two angles of another triangle, then the two triangles are similar. 1m

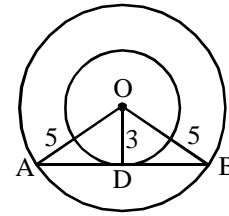
- 3.



$$\begin{aligned} 4. \quad \text{Cos (A+B) = Cos A + Cos B is not right} & \left. \vphantom{\text{Cos (A+B) = Cos A + Cos B is not right}} \right\} \frac{1}{2}m \\ \text{Let us take } A = 60^\circ; B = 30^\circ \text{ then} & \\ \text{Cos (A+B) = Cos (60^\circ+30^\circ) = Cos 90^\circ = 0} & \\ \text{Cos A + Cos B = Cos 60^\circ + Cos 30^\circ = } \frac{\sqrt{3}}{2} + \frac{1}{2} = \frac{\sqrt{3}+1}{2} & \left. \vphantom{\frac{\sqrt{3}}{2} + \frac{1}{2} = \frac{\sqrt{3}+1}{2}} \right\} \frac{1}{2}m \\ \therefore \text{Cos (A+B) } \neq \text{Cos A + Cos B} & \end{aligned}$$

Section - II (Each question carries 2 marks)

5. Let 'O' be the centre of the two concentric circles.
 'AB' is the chord of the larger circle which touches the smaller circle



OA = OB = 5cm (radii of larger circle)

OD = 3cm (radius of smaller circle)

and OD \perp AB

Since OAB is an isosceles triangle, $\left. \begin{array}{l} \text{OD bisects AB} \end{array} \right\} \frac{1}{2}$

\therefore AD = DB

In Δ OAD, by pythagoras theorem $\left. \begin{array}{l} AD = \sqrt{OA^2 - OD^2} \\ = \sqrt{5^2 - 3^2} \\ = 4 \end{array} \right\} 1$

AB = AD + DB = 4 + 4 = 8 cm $\left. \right\} \frac{1}{2}$ 2m

6. Given that $\text{Cos A} = \frac{12}{13}$ $\left. \begin{array}{l} \text{Sin A} = \sqrt{1 - \text{Cos}^2 A} \\ = \sqrt{1 - \frac{12^2}{13^2}} \\ = \frac{5}{13} \end{array} \right\} \frac{1}{2}$

$\text{Cosec A} = \frac{1}{\text{Sin A}} = \frac{13}{5}$ $\left. \right\} \frac{1}{2}$

$\text{Cot A} = \frac{\text{Sin A}}{\text{Cos A}} = \frac{5/13}{12/13} = \frac{5}{12}$ $\left. \right\} 1$ 2m

7. Median = $l + \left(\frac{\frac{n - cf}{2}}{f} \right) \times h$ $\left. \right\} 1$

Where l = lower boundary of median class
 n = number of observations
 cf = cumulative frequency of class preceeding the median class
 f = frequency of median class
 h = size of the median class $\left. \right\} 1$ 2m

8. Given that $\Delta ABC \sim \Delta DEF$

$$\text{and in } \Delta ABC, \sin \theta = \frac{3}{5} = \frac{\text{opposite side to } \theta}{\text{hypotenuse}} \left. \vphantom{\frac{3}{5}} \right\} \frac{1}{2}$$

$$\text{In } \Delta DEF, \tan \theta = \frac{9}{12} = \frac{\text{opposite side to } \theta}{\text{Adjacent side to } \theta} \left. \vphantom{\frac{9}{12}} \right\} \frac{1}{2}$$

$$\therefore 3 \text{ and } 9 \text{ are corresponding sides} \left. \vphantom{3 \text{ and } 9} \right\} \frac{1}{2}$$

$$\therefore \frac{\text{Area of } \Delta ABC}{\text{Area of } \Delta DEF} = \frac{3^2}{9^2} = \frac{9}{81} = \frac{1}{9} \left. \vphantom{\frac{3^2}{9^2}} \right\} \frac{1}{2}$$

$$\therefore \text{Ratio of areas of } \Delta ABC \text{ and } \Delta DEF = 1 : 9 \quad 2\text{m}$$

9. Given that $DE \parallel AB$ in ΔABC and by thales theorem, $\left. \vphantom{DE \parallel AB} \right\} \frac{1}{2}$

$$\frac{CD}{AD} = \frac{CE}{BE}$$

$$\Rightarrow \frac{x+3}{8x+9} = \frac{x}{3x+4} \left. \vphantom{\frac{x+3}{8x+9}} \right\} \frac{1}{2}$$

$$\begin{aligned} \Rightarrow (x+3)(3x+4) &= x(8x+9) \\ \Rightarrow 3x^2 + 13x + 12 &= 8x^2 + 9x \\ \Rightarrow 5x^2 - 4x - 12 &= 0 \\ \Rightarrow (x-2)(5x+6) &= 0 \\ \Rightarrow x=2 \text{ or } x &= -\frac{6}{5} \end{aligned} \left. \vphantom{(x+3)(3x+4)} \right\} \frac{1}{2}$$

$$\text{Since length is non negative, } x=2 \left. \vphantom{x=2} \right\} \frac{1}{2} \quad 2\text{m}$$

Section - III (Each question carries 4 marks)

10 (a) Let the vertices of the parallelogram are $A(1, 2); B(4, y); C(x, 6); D(3, 5)$ $\left. \vphantom{A(1, 2)} \right\} 1$

We know that mid points of the diagonals of a parallelogram are equal

\therefore Mid point of the diagonal AC = Mid point of the diagonal BD

$$\Rightarrow \left(\frac{1+x}{2}, \frac{2+6}{2} \right) = \left(\frac{4+3}{2}, \frac{y+5}{2} \right) \left. \vphantom{\left(\frac{1+x}{2}, \frac{2+6}{2} \right)} \right\} 1$$

$$\Rightarrow \frac{1+x}{2} = \frac{7}{2} \Rightarrow x=6 \left. \vphantom{\frac{1+x}{2}} \right\} 1$$

$$\text{and } \frac{y+5}{2} = \frac{8}{2} \Rightarrow y=3 \left. \vphantom{\frac{y+5}{2}} \right\} \frac{1}{2}$$

4m

10 (b) Class	Frequency
30–39	2
40–49	3
50–59	$20 f_0$
60–69	31 f_1 modal class
70–79	$17 f_2$
80–89	10
90–99	4

$$\text{Mode} = l + \left(\frac{f_1 - f_0}{2f_1 - f_0 - f_2} \right) \times h \quad \left. \vphantom{\text{Mode}} \right\} 1\text{m}$$

$$\text{Here } l = \frac{60+59}{2} = 59.5; f_1 = 31; f_0 = 20; \quad \left. \vphantom{\text{Here}} \right\} 1\text{m}$$

$$f_2 = 17; h = 10$$

$$\therefore \text{Mode} = 59.5 + \left(\frac{31-20}{62-20-17} \right) \times 10 \quad \left. \vphantom{\text{Mode}} \right\} 1\text{m}$$

$$= 59.5 + \left(\frac{11}{25} \right) \times 10 \quad \left. \vphantom{= 59.5} \right\} 1\text{m}$$

$$= 59.5 + 4.4$$

$$= 63.9$$

4m

- 11 (a) Given that OACB is a quadrant of a circle with centre 'O' and radius 3.5cm

$$\therefore \text{Area of the sector OACB} = \frac{x}{360^\circ} \times \pi r^2$$

$$\text{Here } x = 90^\circ; \pi = \frac{22}{7}; r = 3.5$$

$$\therefore \text{Area of the sector OACB} = \frac{90^\circ}{360^\circ} \times \frac{22}{7} \times 3.5 \times 3.5$$

$$= \frac{1}{2} \times 11 \times 0.5 \times 3.5 \quad \left. \vphantom{= \frac{1}{2}} \right\} \frac{1}{2}\text{m}$$

$$= 9.625 \text{ cm}^2$$

OBD is a right angled triangle with sides

$$OB = 3.5 \text{ and } OD = 2 \text{ cm}$$

$$\begin{aligned} \text{Ar. of } \triangle OBD &= \frac{1}{2} \times OB \times OD \\ &= \frac{1}{2} \times 3.5 \times 2 = 3.5 \text{ cm}^2 \end{aligned} \left. \vphantom{\begin{aligned} \text{Ar. of } \triangle OBD \\ = \frac{1}{2} \times 3.5 \times 2 = 3.5 \text{ cm}^2 \end{aligned}} \right\} 1 \frac{1}{2} \text{ m}$$

$$\begin{aligned} \text{Area of shaded region} &= \text{Ar. of OACB} - \text{Ar. } \triangle OBD \left. \vphantom{\begin{aligned} \text{Area of shaded region} \\ = \text{Ar. of OACB} - \text{Ar. } \triangle OBD \end{aligned}} \right\} \frac{1}{2} \\ &= 9.625 - 3.5 \left. \vphantom{\begin{aligned} \text{Area of shaded region} \\ = 9.625 - 3.5 \end{aligned}} \right\} \frac{1}{2} \\ &= 6.125 \text{ cm}^2 \end{aligned} \quad 4\text{m}$$

$$11 \quad (\text{b}) \quad (\text{i}) \quad \frac{\sin 30^\circ + \tan 45^\circ - \operatorname{Cosec} 60^\circ}{\cot 45^\circ + \cos 60^\circ - \sec 30^\circ} = \frac{\frac{1}{2} + 1 - \frac{2}{\sqrt{3}}}{1 + \frac{1}{2} - \frac{2}{\sqrt{3}}} = 1 \left. \vphantom{\frac{\sin 30^\circ + \tan 45^\circ - \operatorname{Cosec} 60^\circ}{\cot 45^\circ + \cos 60^\circ - \sec 30^\circ}} \right\} 2\text{m}$$

$$\begin{aligned} (\text{ii}) \quad 2 \tan^2 45^\circ + \cos^2 30^\circ - \sin^2 30^\circ &= 2(1)^2 + \left(\frac{\sqrt{3}}{2}\right)^2 - \left(\frac{1}{2}\right)^2 \left. \vphantom{2 \tan^2 45^\circ + \cos^2 30^\circ - \sin^2 30^\circ} \right\} 1\text{m} \\ &= 2 + \frac{3}{4} - \frac{1}{4} = \frac{5}{2} \left. \vphantom{2 \tan^2 45^\circ + \cos^2 30^\circ - \sin^2 30^\circ} \right\} 1\text{m} \end{aligned} \quad 4\text{m}$$

12 (a) Given that A (0, 1), B (2, 1), C (0, 3) are the vertices of $\triangle ABC$

$$\text{Ar. } \triangle ABC = \frac{1}{2} \left| x_1(y_2 - y_3) + x_2(y_3 - y_1) + x_3(y_1 - y_2) \right| \left. \vphantom{\frac{1}{2} \left| x_1(y_2 - y_3) + x_2(y_3 - y_1) + x_3(y_1 - y_2) \right|}} \right\} \frac{1}{2} \text{ m}$$

$$\text{Here } A \begin{pmatrix} 0 & 1 \\ x_1 & y_1 \end{pmatrix}; B \begin{pmatrix} 2 & 1 \\ x_2 & y_2 \end{pmatrix}; C \begin{pmatrix} 0 & 3 \\ x_3 & y_3 \end{pmatrix}; \left. \vphantom{\begin{pmatrix} 0 & 1 \\ x_1 & y_1 \end{pmatrix}; B \begin{pmatrix} 2 & 1 \\ x_2 & y_2 \end{pmatrix}; C \begin{pmatrix} 0 & 3 \\ x_3 & y_3 \end{pmatrix};} \right\}$$

$$\begin{aligned} \text{Ar. } \triangle ABC &= \frac{1}{2} \left| 0(1-3) + 2(3-1) + 0(1-2) \right| \left. \vphantom{\frac{1}{2} \left| 0(1-3) + 2(3-1) + 0(1-2) \right|}} \right\} 1\text{m} \\ &= \frac{1}{2} |4| = 2 \text{ sq. units} \end{aligned}$$

$$\text{Mid point of } B(2, 1); C(0, 3) \text{ is } D = \left(\frac{2+0}{2}, \frac{1+3}{2}\right) = (1, 2) \left. \vphantom{\left(\frac{2+0}{2}, \frac{1+3}{2}\right) = (1, 2)} \right\}$$

$$\text{Mid point of } C(0, 3); A(0, 1) \text{ is } E = \left(\frac{0+0}{2}, \frac{3+1}{2}\right) = (0, 2) \left. \vphantom{\left(\frac{0+0}{2}, \frac{3+1}{2}\right) = (0, 2)} \right\} 1\text{m}$$

$$\text{Mid point of } A(0, 1); B(2, 1) \text{ is } F = \left(\frac{0+2}{2}, \frac{1+1}{2}\right) = (1, 1) \left. \vphantom{\left(\frac{0+2}{2}, \frac{1+1}{2}\right) = (1, 1)} \right\}$$

Ar. of $D \begin{pmatrix} 1, & 2 \\ x_1 & y_1 \end{pmatrix}, E \begin{pmatrix} 0, & 2 \\ x_2 & y_2 \end{pmatrix}, F \begin{pmatrix} 1, & 1 \\ x_3 & y_3 \end{pmatrix}$ is

$$\left. \begin{aligned} \text{Ar. } \triangle DEF &= \frac{1}{2} | 1(2-1) + 0(1-2) + 1(2-2) | \\ &= \frac{1}{2} |1| = \frac{1}{2} \text{ sq. units} \end{aligned} \right\} 1\text{m}$$

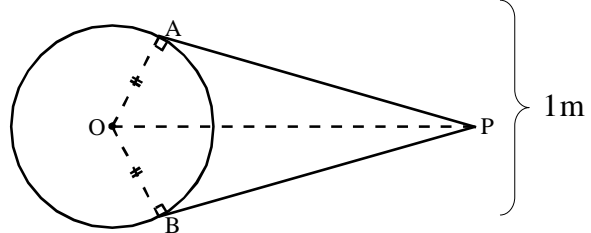
$$\therefore 4(\text{Ar. } \triangle DEF) = 4\left(\frac{1}{2}\right) = 2 = \text{Ar. } \triangle ABC \left\} \frac{1}{2} \quad 4\text{m}$$

- 12 (b) Given : A circle with Centre 'O', 'P' is a point lying outside the circle and PA and PB are two tangents to the circle from 'P'. } 1m

To prove : PA = PB

Proof : Join OA, OB and OP

$\angle OAP = \angle OBP = 90^\circ$
(Angle between radii and tangents)



In $\triangle OAP$ and $\triangle OBP$,

OA = OB (radii of same circle) } 1m

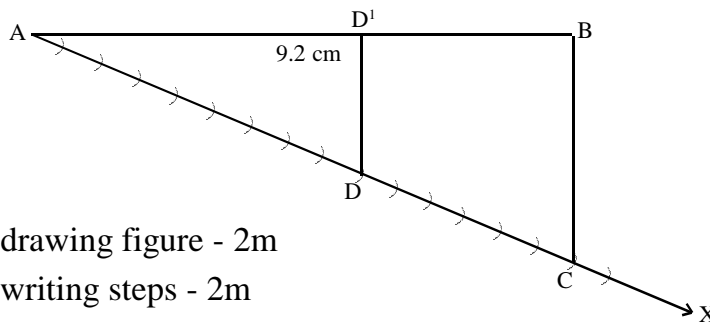
OP = OP (common)

$\therefore \triangle OAP \cong \triangle OBP$ (R.H.S. Congruency) } 1m

PA = PB

Hence proved. 4m

- 13 (a)



For drawing figure - 2m

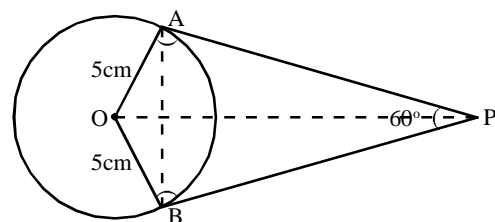
For writing steps - 2m

- 13 (b) For drawing rough sketch - 1m

For construction - 2m

For writing steps - 1m

4m



Rough Sketch

SUMMATIVE ASSESSMENT - II - 2016 - 2017

CLASS-X - MATHS - PAPER-I

KEY

Class : X

Part - B

Marks : 20

III. भाषांशः

14. C
15. B
16. A
17. A
18. C
19. D
20. C
21. D
22. A
23. C
24. A
25. A
26. C
27. B
28. A
29. A
30. A
31. D
32. B
33. D